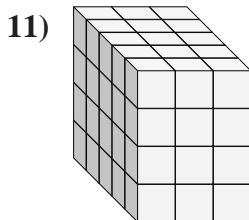
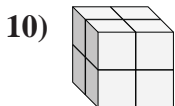
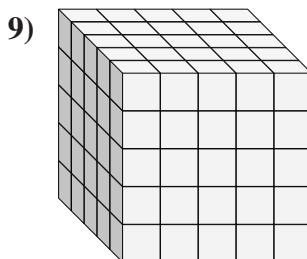
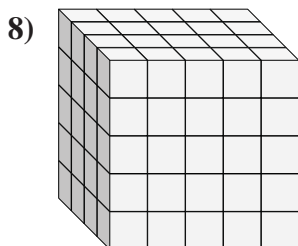
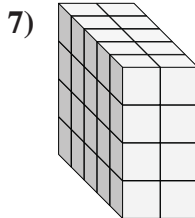
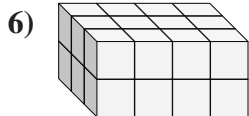
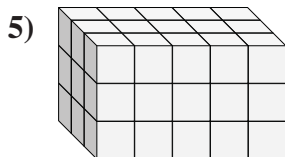
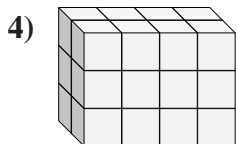
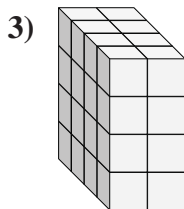
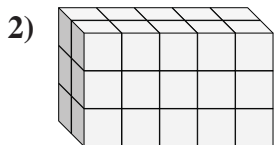
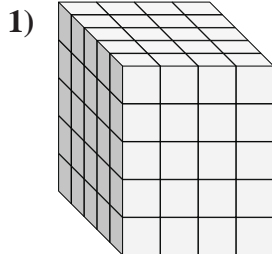
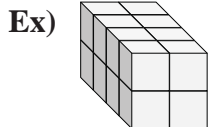




Find the length, width and height of the rectangular prism. Then find the volume.



Answers

	L	W	H	V
Ex.	<u>4</u>	<u>2</u>	<u>2</u>	<u>16</u>
1.	<u>5</u>	<u>4</u>	<u>5</u>	<u>100</u>
2.	<u>2</u>	<u>5</u>	<u>3</u>	<u>30</u>
3.	<u>4</u>	<u>2</u>	<u>4</u>	<u>32</u>
4.	<u>2</u>	<u>4</u>	<u>3</u>	<u>24</u>
5.	<u>3</u>	<u>5</u>	<u>3</u>	<u>45</u>
6.	<u>3</u>	<u>4</u>	<u>2</u>	<u>24</u>
7.	<u>5</u>	<u>2</u>	<u>4</u>	<u>40</u>
8.	<u>4</u>	<u>5</u>	<u>5</u>	<u>100</u>
9.	<u>5</u>	<u>5</u>	<u>5</u>	<u>125</u>
10.	<u>2</u>	<u>2</u>	<u>2</u>	<u>8</u>
11.	<u>5</u>	<u>3</u>	<u>4</u>	<u>60</u>